

# Simple electrical circuits



# L1 Current

## Electric Current

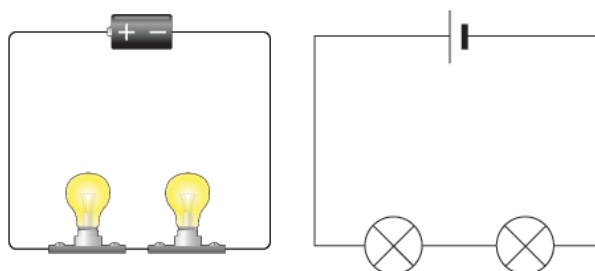
Imagine you're at a water park. The water flowing through the slides is like electricity flowing through wires. Just as the water needs a pump to get it moving, electricity needs a power source, like a battery or a power outlet. This movement of electric charge is called electric current. Electric current is the rate of flow of charge through a conductor, like a wire. The unit used to measure electric current is the **ampere**, often shortened to **amp** and symbolized as **A**. Think of amps as a way to count how many "electric swimmers" are moving through the wire each second.

## Series Circuits

Now, let's talk about circuits. A circuit is like a racetrack for electricity, providing a path for the electric current to flow. There are different types of circuits, but we'll focus on one called a **series circuit**.

In a series circuit, all the components (like light bulbs, resistors, or motors) are connected one after another in a single path. It's similar to a single-lane road where all cars must follow the same route. Here's a simple way to imagine it:

1. **Battery:** This is like the starting point of our race. It provides the energy needed for the current to flow.
2. **Wires:** These are the racetrack paths connecting everything together.
3. **Light Bulbs:** These are like checkpoints on the race track. Each one needs the electric current to light up.



When you connect a battery to a series of light bulbs in a series circuit, the electric current flows from the battery, through each light bulb in turn, and back to the battery.

## How Current Works in a Series Circuit

Let's use an example to understand this better. Imagine you have a battery and three light bulbs connected in a series circuit. When you turn on the circuit, the battery starts pushing electric current through the first bulb, then the second, and finally the third, before returning to the battery.

Here's the cool part: because it's a series circuit, the electric current flowing through each bulb is the same. So, if you measure the current (in amps) at any point in the circuit, it will be the same everywhere. This is because there is only one path for the electric current to travel.

If the battery provides 2 amps of current, then 2 amps will flow through the first bulb, 2 amps through the second, and 2 amps through the third.

## What Happens When One Component Fails

Let's imagine one of the light bulbs in our series circuit burns out or is removed. What do you think happens? In a series circuit, if one component (like a light bulb) stops working, the entire circuit is broken. It's like having a gap in our racetrack; the cars can't complete the race. So, if one light bulb goes out, all the light bulbs in the series circuit will go out because the electric current can't flow anymore.

## Advantages and Disadvantages

### Advantages:

1. **Simplicity:** Series circuits are easy to design and build.
2. **Equal Current:** Every component in a series circuit gets the same amount of current.

### Disadvantages:

1. **Dependency:** If one component fails, the whole circuit stops working.
2. **Voltage Drop:** The more components you add, the dimmer each light bulb becomes because the battery's voltage is divided among all the components.

### Summary

Electric current is the rate of flow of electric charge through a conductor, measured in amperes. In a series circuit, components are connected one after another, creating a single path for the current to flow. The current is the same through every part of the series circuit, but if one component fails, the entire circuit stops working.

By understanding these basics, you can start to see how electricity powers everything from tiny gadgets to huge machines. It's like the magic that keeps our modern world running!

Independent practice

**Comprehension Questions:**

1. What is electric current, and how is it measured?
2. Describe how components are connected in a series circuit.
3. What happens to the electric current if one light bulb in a series circuit stops working?
4. Why does every component in a series circuit receive the same amount of current?

**Understanding Questions:**

1. Compare and contrast electric current in a wire with water flowing in a pipe.
2. Explain why a series circuit stops working if one component fails.
3. Predict what would happen to the brightness of light bulbs in a series circuit if more bulbs were added without changing the battery.
4. Discuss the advantages and disadvantages of using series circuits in household appliances compared to parallel circuits.
5. Imagine you have a series circuit with three light bulbs. If you measure the current right after the battery and then right before the last light bulb, would the measurements be the same or different? Explain your reasoning.

**Finding and Correcting Mistakes Questions:**

1. Identify and correct any mistakes in this statement: "In a series circuit, each component receives a different amount of current depending on its resistance."
2. Find and correct the mistake in this sentence: "If one light bulb burns out in a series circuit, the other bulbs will get brighter."
3. Locate and fix any errors in this statement: "Series circuits are always better than parallel circuits because they use less electricity."

## L2 Potential difference

### Potential Difference (Voltage):

Potential difference, or voltage, is the difference in energy between two points in an electrical circuit. It represents the amount of energy that electric charges gain or lose as they move from one point to another. Voltage is measured in volts (V). For example, a small battery might have 1.5 volts, while a larger one could have 9 volts. This difference in voltage determines how much energy the electricity has to power devices in a circuit.

### Batteries:

Batteries are devices that store chemical energy and convert it into electrical energy. Inside a battery, chemical reactions create a voltage difference between its positive (+) and negative (-) terminals. When connected to a circuit, batteries provide the necessary voltage (energy) to power devices such as light bulbs or toys. Batteries come in various sizes and types, each designed to provide different amounts of voltage (energy) to suit specific applications.

### Bulb Ratings:

Light bulbs are devices that convert electrical energy into light. They have two primary ratings: wattage and voltage. Wattage (measured in watts, W) indicates how much electrical power the bulb consumes and how much light it produces. A higher wattage bulb consumes more electrical energy and produces more light output. Voltage rating (measured in volts, V) specifies the amount of voltage (energy) required for the bulb to operate correctly. Using a higher voltage than the bulb's rating can potentially damage it.

For example, a typical household bulb might be rated at 60 watts and 120 volts. This means it consumes 60 watts of electrical power and requires 120 volts of electrical energy to emit light effectively. Lower wattage bulbs consume less electrical energy but produce less light output accordingly.

### Summary:

In summary, potential difference (voltage) is the energy difference between two points in an electrical circuit, crucial for powering devices like light bulbs with batteries. Batteries store and provide electrical energy through chemical reactions, while light bulbs convert this electrical energy into visible light. Understanding these fundamental concepts helps us appreciate how energy is transferred and utilized in electrical systems, ensuring devices operate safely and efficiently.

Exploring these principles further can deepen your understanding of electricity and its role in technology. Keep exploring and asking questions to uncover more about the fascinating world of electrical circuits and energy transfer!

### Independent practice

Certainly! Here's a revised explanation focusing on potential difference, batteries, and bulb ratings with an emphasis on energy:

#### **Potential Difference (Voltage):**

Potential difference, or voltage, is the difference in energy between two points in an electrical circuit. It represents the amount of energy that electric charges gain or lose as they move from one point to another. Voltage is measured in volts (V). For example, a small battery might have 1.5 volts, while a larger one could have 9 volts. This difference in voltage determines how much energy the electricity must power devices in a circuit.

#### **Batteries:**

Batteries are devices that store chemical energy and convert it into electrical energy. Inside a battery, chemical reactions create a voltage difference between its positive (+) and negative (-) terminals. When connected to a circuit, batteries provide the necessary voltage (energy) to power devices such as light bulbs or toys. Batteries come in various sizes and types, each designed to provide different amounts of voltage (energy) to suit specific applications.

#### **Bulb Ratings:**

Light bulbs are devices that convert electrical energy into light. They have two primary ratings: wattage and voltage. Wattage (measured in watts, W) indicates how much electrical power the bulb consumes and how much light it produces. A higher wattage bulb consumes more electrical energy and produces more light output. Voltage rating (measured in volts, V) specifies the amount of voltage (energy) required for the bulb to operate correctly. Using a higher voltage than the bulb's rating can potentially damage it.

For example, a typical household bulb might be rated at 60 watts and 120 volts. This means it consumes 60 watts of electrical power and requires 120 volts of electrical energy to emit light effectively. Lower wattage bulbs consume less electrical energy but produce less light output accordingly.

#### **Summary:**

In summary, potential difference (voltage) is the energy difference between two points in an electrical circuit, crucial for powering devices like light bulbs with batteries. Batteries store and provide electrical energy through chemical reactions, while light bulbs convert this electrical energy into visible light. Understanding these fundamental concepts helps us appreciate how energy is transferred and utilized in electrical systems, ensuring devices operate safely and efficiently.

Exploring these principles further can deepen your understanding of electricity and its role in technology. Keep exploring and asking questions to uncover more about the fascinating world of electrical circuits and energy transfer!

**Comprehension Questions:**

1. What is potential difference, and how is it measured?
2. How do batteries generate electricity in a circuit?
3. Why is it important to match the voltage rating of a light bulb with the voltage supplied by a battery?

**Understanding Questions:**

1. How does voltage relate to the flow of electrical energy in a circuit?
2. Compare and contrast the functions of wattage and voltage ratings on light bulbs.
3. Explain why using a higher voltage than the rating of a light bulb can be harmful.
4. Describe the role of chemical reactions inside a battery in generating electricity.
5. What are the consequences of using a bulb with a wattage rating that is too high for a given fixture?

**Sentence Completion Questions:**

1. Light bulbs need electricity to produce light, **because...**
2. Batteries provide voltage to electrical circuits, **but...**
3. The wattage of a light bulb indicates its power consumption, **and..**
4. Connecting a bulb to a voltage higher than its rating can cause damage, **but...**
5. Potential difference, measured in volts, is crucial in circuits **because...**

## L3 Potential Difference and current

Potential difference (p.d.) in an electric circuit refers to the difference in electric potential energy per unit charge between two points. It's measured in volts (V). Think of it as the amount of energy available to push electric charges through a circuit. Just like higher ground gives more gravitational potential energy to a ball rolled downhill, a higher potential difference gives more energy to electric charges moving through a circuit.

Current, on the other hand, refers to the rate of flow of electric charges through a circuit. It's measured in amperes (A) and tells us how many charges pass through a point in the circuit per second.

The ratio of potential difference to current (p.d. / current) is important because it helps us understand how much energy is available to move charges (current) through a circuit:

- **High Ratio (High p.d. / Current):** This means there's a larger amount of energy available (high potential difference) for each unit of charge flowing (current). In practical terms, this could mean a brighter light bulb or a more powerful electrical device that requires more energy to operate efficiently.
- **Low Ratio (Low p.d. / Current):** This means there's less energy available (low potential difference) for each unit of charge flowing (current). This might correspond to a dimmer light bulb or a smaller electrical device that requires less energy to function.

In essence, the ratio of potential difference to current helps engineers and scientists design circuits to ensure that devices receive the right amount of energy they need to function properly. It reflects the efficiency and capacity of a circuit to deliver electrical power to devices. Understanding this ratio is fundamental in determining how electricity behaves within different parts of a circuit and why certain devices require varying amounts of electrical power to operate effectively.



### Independent practice

#### **Comprehension Questions**

1. What is the potential difference (p.d.) in an electric circuit and what is it measured in?
2. How is current defined in an electric circuit and what is its unit of measurement?
3. Explain what a high ratio of potential difference to current indicates about the energy available to move charges in a circuit.
4. Why is the ratio of potential difference to current important for designing electrical circuits?

#### **Understanding Questions**

1. If the potential difference in a circuit is 12 volts and the current is 2 amperes, what is the ratio of potential difference to current?
2. Describe what would happen to the current if the potential difference in a circuit is increased while the resistance remains constant.
3. How does the ratio of potential difference to current help in determining the power consumption of an electrical device?

#### **Find and Correct the Mistake**

1. **Statement:** Potential difference is measured in amperes (A).
2. **Statement:** Current refers to the amount of energy available to push charges through a circuit.
3. **Statement:** A low ratio of potential difference to current means that there is a large amount of energy available for each unit of charge flowing through the circuit.
4. **Statement:** The ratio of potential difference to current is not important for designing electrical circuits.

# L4 Static

Imagine you have a balloon and a wool sweater. If you rub the balloon against the sweater, something interesting happens. The balloon can stick to the wall or make your hair stand up if you bring it close to your head. This magic is all about the movement of tiny particles called electrons and the forces between charged objects. Let's break it down.

## What Are Electrons?

Everything around us is made up of tiny particles called atoms. Atoms are so small that you can't see them without a special microscope. Each atom has even tinier parts: protons, neutrons, and electrons.

- **Protons** have a positive charge (+).
- **Electrons** have a negative charge (-).
- **Neutrons** have no charge (they are neutral).


In a normal atom, the number of protons and electrons is the same, so the atom is neutral, meaning it has no overall charge.

## Rubbing Objects and Electron Transfer

When you rub two different materials together, like a balloon and a sweater, something happens to the electrons. Some materials, like the wool in the sweater, have a tendency to lose electrons. Other materials, like the rubber in the balloon, have a tendency to gain electrons.

When you rub the balloon on the sweater:

1. **Electron Transfer:** Electrons move from the wool sweater to the balloon. This transfer of electrons makes the balloon gain extra electrons and become negatively charged.
2. **Charge Separation:** The sweater loses electrons and becomes positively charged because it has more protons than electrons now.



## Forces Between Charged Objects

Now that the balloon is negatively charged and the sweater is positively charged, they exhibit some interesting behaviors:

- **Attraction:** Opposite charges attract each other. The negatively charged balloon will be attracted to the positively charged sweater. This is why the balloon might stick to the sweater or why your hair stands up when you bring the balloon near it. Your hair, when rubbed, might become positively charged and is attracted to the negative balloon.
- **Repulsion:** Like charges repel each other. If you had two balloons that you both rubbed on the sweater, both balloons would be negatively charged. If you try to bring them close to each other, they will push away from each other because like charges repel.

## Real-Life Examples and Applications

This principle of charge separation and forces between charges is not just a fun trick; it's also used in many everyday technologies.

- **Static Electricity:** The shock you sometimes get when touching a doorknob after walking on a carpet is due to the transfer of electrons. Your body picks up extra electrons from the carpet and when you touch the metal doorknob, the electrons jump to the doorknob, causing a small shock.
- **Photocopiers and Laser Printers:** These devices use static electricity to attract toner (a kind of ink) to paper in the right places to form letters and images.
- **Electronics:** The movement of electrons through wires and components is the basic idea behind how electronic devices like phones, computers, and TVs work.

## Experiment at Home

You can try this at home to see charge separation in action. You'll need a balloon and a wool sweater or a piece of wool cloth.

1. Blow up the balloon and tie it.
2. Rub the balloon vigorously on the wool sweater for about 10-20 seconds.
3. Now, bring the balloon close to small pieces of paper, your hair, or even a wall.

You'll notice that the paper pieces jump to the balloon, your hair stands up, or the balloon sticks to the wall. This happens because you've transferred electrons from the wool to the balloon, giving it a negative charge, which then attracts neutral or positively charged objects.

Understanding how charges work and move helps us see the hidden forces in our world and is the foundation for many important technologies. It's like discovering a hidden power that makes so many things around us work!

Independent practice

Comprehension Questions

1. What happens to electrons when you rub a balloon on a wool sweater?
2. Why does the balloon stick to the wall after being rubbed on the sweater?
3. Explain why two balloons that have been rubbed on a wool sweater repel each other when brought close.
4. Give an example of how static electricity is used in everyday technology.

Understanding Questions

1. Describe the charges of protons, electrons, and neutrons.
2. What is the result of the electron transfer between the balloon and the sweater?
3. How does the principle of charge separation help in the functioning of a photocopier?

Sentence Completion

1. When a balloon is rubbed against a wool sweater, it becomes negatively charged, whereas...
2. Opposite charges attract each other, therefore...
3. Two objects with like charges repel each other, so...
4. A person can get a small shock after walking on a carpet and touching a doorknob, whereas...

# L5 Electrical Fields

## Understanding Electric Fields and Forces at a Distance

Imagine you have a magnet. When you bring a paperclip close to it, the paperclip jumps to the magnet even though they aren't touching. This happens because of a magnetic field, an invisible force field around the magnet that pulls on the paperclip. Electric fields work in a similar way, but they involve electric charges instead of magnets.

### What is an Electric Field?

An electric field is like an invisible force field around a charged object. This force field can push or pull other charged objects even when they are not touching. To understand this better, let's look at an example.

Imagine you have two balloons. When you rub both of them on your hair, they become charged with static electricity. If you try to bring them close together, they push away from each other. Why? Because they have the same type of charge (let's call it positive charge).

The space around these balloons is filled with an electric field. This electric field is what causes the balloons to repel each other. It's like having invisible hands pushing the balloons apart.

### Forces at a Distance

Usually, when we think about forces, we think of things that touch each other, like pushing a door to open it. However, electric forces can act across empty space. This is what we mean by forces acting at a distance.

Just like a magnet creates a magnetic field that pulls a paperclip towards it, a charged object creates an electric field that can attract or repel other charges. The key difference is that magnetic fields involve magnets and magnetic materials, while electric fields involve electric charges.

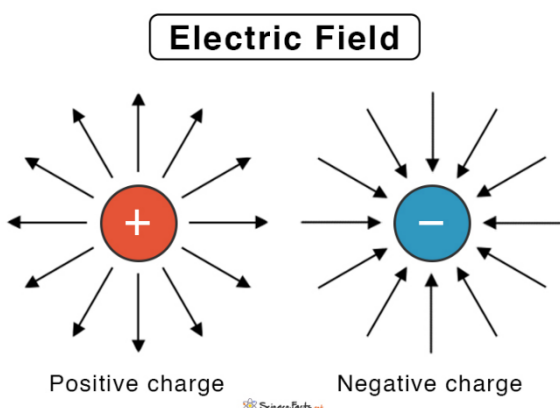
### Positive and Negative Charges

Everything around us is made up of tiny particles called atoms. Atoms have even tinier particles called protons and electrons. Protons have a positive charge, and electrons have a negative charge.

- **Positive charges repel other positive charges.**
- **Negative charges repel other negative charges.**
- **Positive and negative charges attract each other.**

When you rub a balloon on your hair, electrons move from your hair to the balloon. The balloon gets extra electrons and becomes negatively charged, while your hair loses electrons and becomes positively charged.

If you bring another negatively charged balloon close to the first one, they will repel each other because like charges repel. But if you bring a positively charged object close to the negatively charged balloon, they will attract each other because opposite charges attract.



### Visualizing Electric Fields

To visualize an electric field, imagine drawing lines around a charged object. These lines show the direction in which a positive test charge would move if placed in the field. For a positively charged object, the lines radiate outward, showing that another positive charge would be pushed away. For a negatively charged object, the lines point inward, showing that a positive charge would be pulled towards it.

### **Electric Field Strength**

The strength of an electric field depends on how close you are to the charged object. The closer you are, the stronger the field. Think of it like the heat from a fire: the closer you get, the hotter it feels.

### **Real-Life Applications**

Electric fields are not just a cool science concept; they have real-life applications. For example, lightning is a giant spark caused by electric fields between clouds and the ground. Your TV remote uses an electric field to send signals to the TV.

In summary, electric fields are invisible forces created by charged objects, similar to how magnetic fields are created by magnets. These fields can push or pull other charges across space without the objects needing to touch. By understanding electric fields, we get a glimpse into the fascinating world of how invisible forces shape the interactions in our everyday lives.

## Independent practice

### Comprehension Questions

1. What is an electric field?
2. How can a charged balloon stick to a wall?
3. Why do two balloons rubbed on hair repel each other?
4. How does the strength of an electric field change with distance?
5. Give an example of a real-life application of electric fields.

### Understanding Questions

1. Explain how a paperclip moves towards a magnet even when they are not touching.
2. Describe the difference between electric fields and magnetic fields.
3. How do positive and negative charges interact with each other?
4. Why does rubbing a balloon on your hair cause the balloon to become negatively charged?
5. What does it mean for forces to act at a distance?

### Multiple Choice Questions

1. **Which statement correctly describes the interaction between a positively charged object and a negatively charged object?**
  - A. "A positively charged object repels a negatively charged object because they have different types of charges."
  - B. "A positively charged object attracts a negatively charged object because opposite charges attract each other."
  - C. "A positively charged object has no effect on a negatively charged object because they are not the same."
2. **How do electric fields around charged objects behave?**
  - A. "Electric fields around positively charged objects radiate inward."
  - B. "Electric fields around negatively charged objects radiate outward."
  - C. "Electric fields around positively charged objects radiate outward."
3. **What happens when you bring two negatively charged balloons close to each other?**
  - A. "They will attract each other because like charges attract."
  - B. "They will repel each other because like charges repel."
  - C. "They will have no effect on each other because they are both negatively charged."
4. **Which statement best explains why lightning occurs?**
  - A. "Lightning happens because clouds and the ground create a magnetic field."
  - B. "Lightning is a result of electric fields between clouds and the ground."
  - C. "Lightning is caused by the movement of neutral particles between clouds and the ground."